

Schütteln mit —

<input type="text"/>	<input type="text"/>

<input type="text"/>	<input type="text"/>

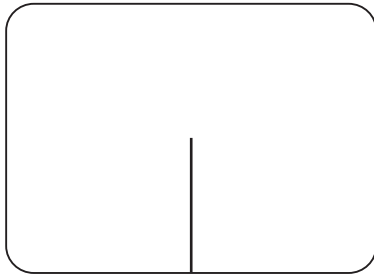
<input type="text"/>	<input type="text"/>

<input type="text"/>	<input type="text"/>

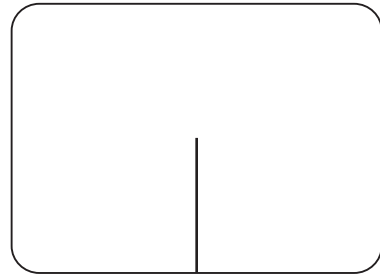
<input type="text"/>	<input type="text"/>

<input type="text"/>	<input type="text"/>

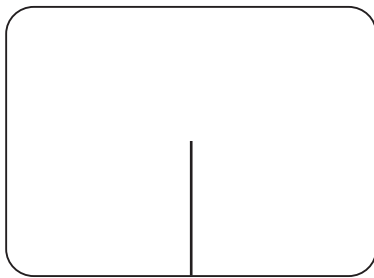
Zerlegungen finden zu



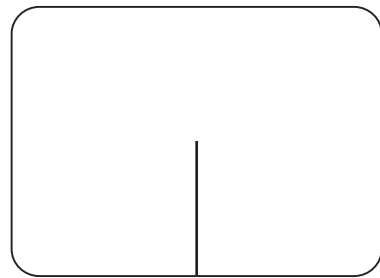
$$\square + \square$$



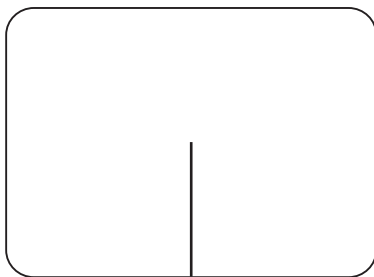
$$\square + \square$$




$$\square + \square$$



$$\square + \square$$



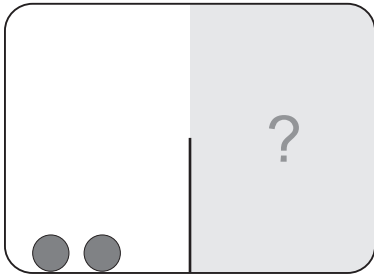
$$\square + \square$$



$$\square + \square$$

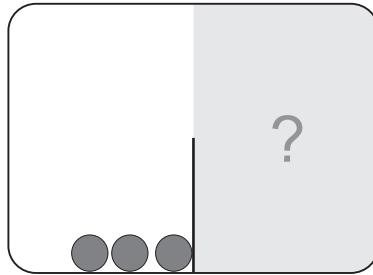
Ergänzen

6



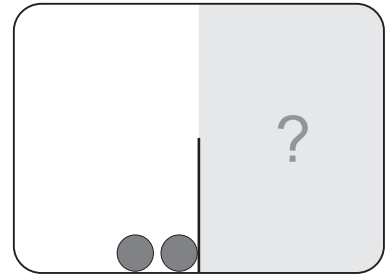
$$\square + \square$$

4



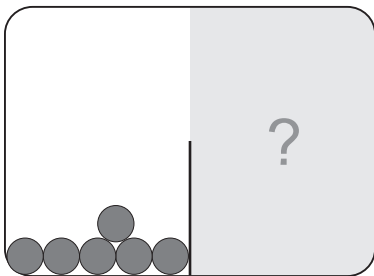
$$\square + \square$$

9



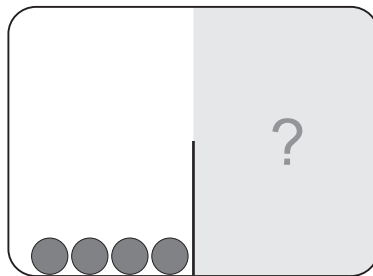
$$\square + \square$$

8



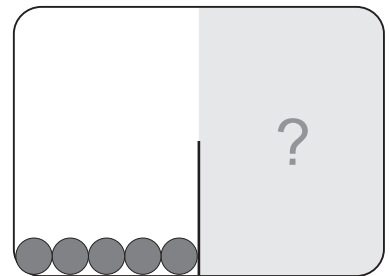
$$\square + \square$$

5



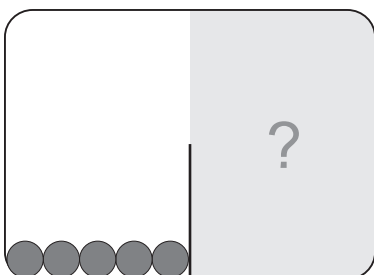
$$\square + \square$$

7



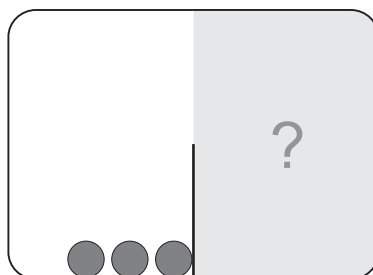
$$\square + \square$$

9



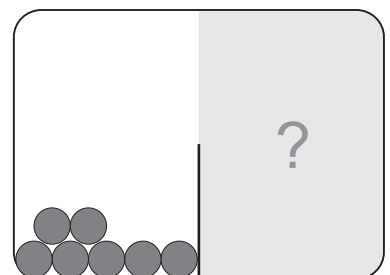
$$\square + \square$$

6



$$\square + \square$$

8



$$\square + \square$$

Ergänzen

